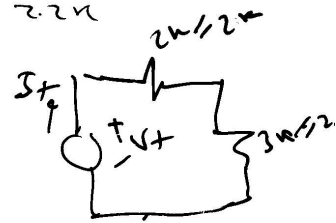
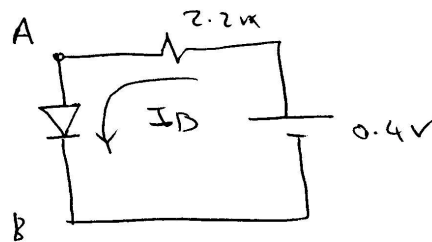


Find the Q-point for the shown diode using the ideal diode model and the CD model with  $V_{D,on} = 0.6V$

\* we first get the Thevenin equivalent between A & B

$$V_{th} = V_A - V_B = 4 \times \frac{2}{4} - 4 \times \frac{2}{5} = 2 - 1.6 = 0.4V$$

$$R_{th} = 2k \parallel 2k + 3k \parallel 2k = 1k + 1.2k = 2.2k$$

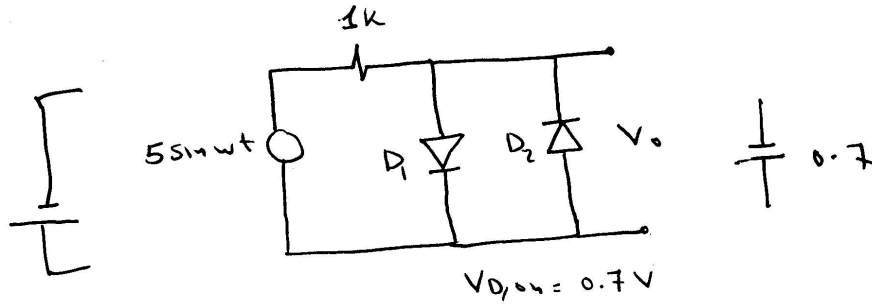


\* using ideal diode: Diode must be on and

$$I_D = \frac{0.4}{2.2k} = 0.182mA \Rightarrow \text{Q-point } (0, 0.182mA)$$

\* using CD model  $0.4 < V_{D,on} \Rightarrow$  Diode must be

$$\text{off} \Rightarrow \text{Q-point } (0.4, 0)$$

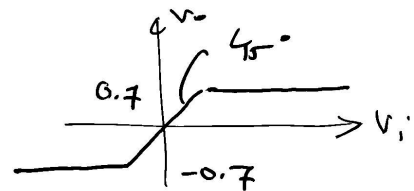
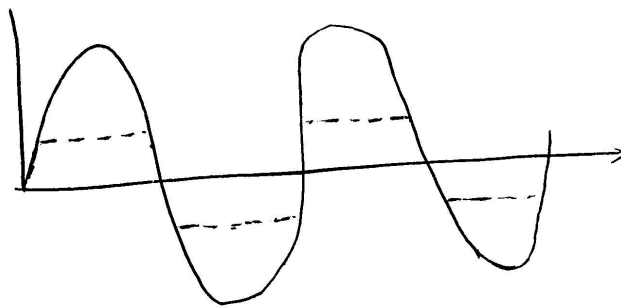


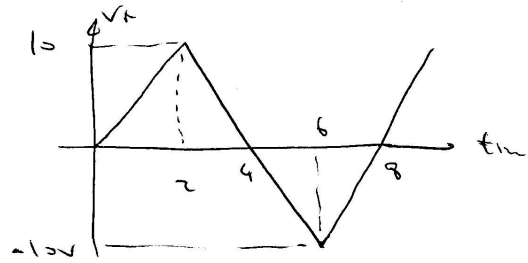
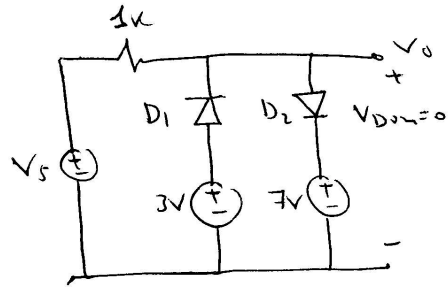
Express the output voltage as a function of the input voltage.

\* If  $V_i > V_{D,on}$ ,  $D_1$  is forward biased and  $D_2$  is reverse biased  $\Rightarrow V_o = V_{D,on} = 0.7V$

\* If  $V_i < -V_{D,on}$ ,  $D_1$  is off,  $D_2$  is on  
 $V_o = -V_{D,on} = -0.7V$

\* If  $-V_{D,on} < V_i < V_{D,on}$  both diodes are off  
 and  $V_o = V_i$



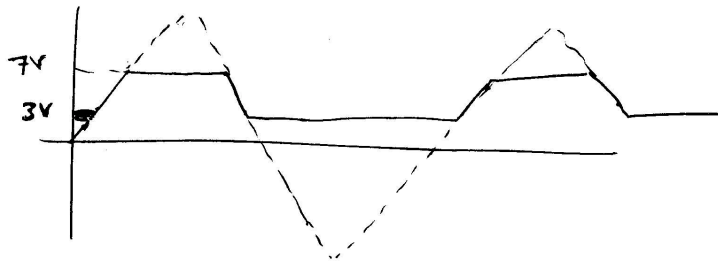


\* Determine the output waveform corresponding to the shown triangular input?

\* If  $V_s \leq 3V$ ,  $D_1$  is forward biased  $\Rightarrow V_o = 3V$

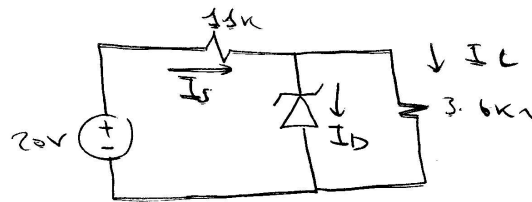
\* If  $V_s \geq 7V$ ,  $D_2$  is off  $\Rightarrow V_o = 7V$

\* If  $3 < V_s < 7$  both diodes are off  
 $V_o = V_{in}$

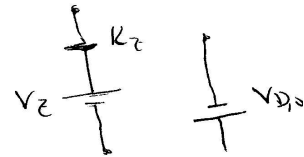
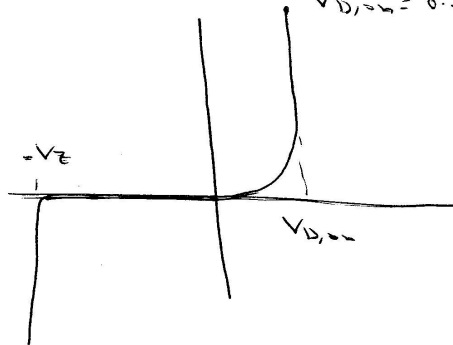


3

Find the Q point of the shown Zener diode circuit



$V_Z = 4V$   
 $R_Z = \infty$   
 $V_{D, on} = 0.7V$



\* Diode cannot be in forward region because  $V_D < 0$

\* Assume ~~that~~ that diode is in cut-off region

$$I_s = I_L = \frac{20}{14.6k} = 1.369 \text{ mA}$$

$$\therefore V_L = I_L \times 3.6k = 4.93$$

but  $V_L > V_Z \Rightarrow$  Diode must be in breakdown region (a contradiction)

$$\therefore V_L = 4V \Rightarrow I_L = 1.11 \text{ mA}, \quad I_s = \frac{20 - 4}{1k} = 1.6 \text{ mA}$$

$$I_D = I_s - I_L = 0.49 \text{ mA} \Rightarrow \text{Q-point } (-4, -0.49 \text{ mA})$$